



# Flashback 4

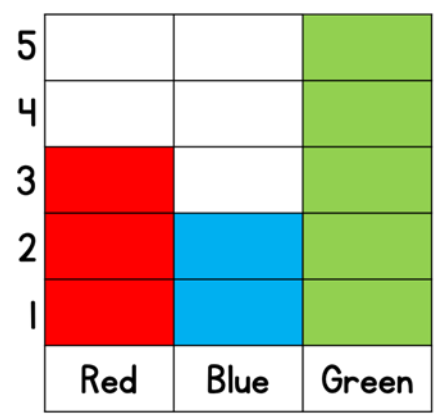
1) How many groups of 3 can you make?



2) How many vertices does the shape have?



3) How many more people like green than blue?



4) How much money is there?

